

Divide 2-digits by 1-digit (1)



I There are 84 pencils to be shared equally into 4 pots.



a) Draw the pencils on the place value chart to show how they are shared.



Tens	Ones

© White Rose Maths 2019



I **b)** Complete the number sentences.

$$8 \text{ tens} \div 4 = \square \text{ tens}$$

$$4 \text{ ones} \div 4 = \square \text{ one}$$

$$84 \div 4 = \square$$

c) How many pencils are in each pot?

© White Rose Maths 2019



2 Use a place value chart to work out the calculations.

a) $39 \div 3 =$

b) $68 \div 2 =$

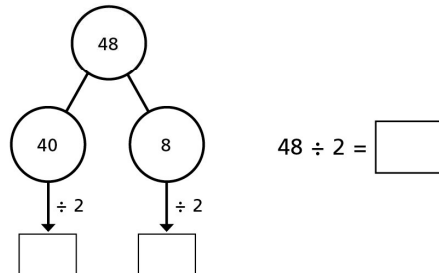
© White Rose Maths 2019



3 Amir solves $48 \div 2$ on a place value chart.

Tens	Ones

Complete the part-whole model to show what Amir has done.

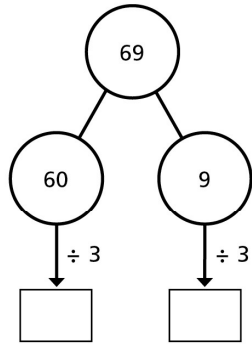


© White Rose Maths 2019

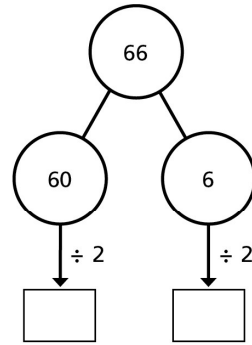


4 Work out the divisions.

a) $69 \div 3 = \square$



b) $66 \div 2 = \square$

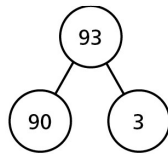


© White Rose Maths 2019

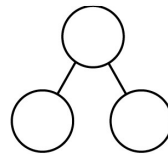


5 Work out the divisions.

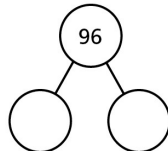
a) $93 \div 3 = \square$




$99 \div 3 = \square$



$96 \div 3 = \square$



© White Rose Maths 2019




5 b) $82 \div 2 =$


$84 \div 2 =$

$86 \div 2 =$


What do you notice?



© White Rose Maths 2019



6





88 can be divided equally by 2 and by 4

Do you agree with Annie? _____

Explain why.

Can Annie divide 88 equally by any other 1-digit numbers?

© White Rose Maths 2019

- 7 Esther has 2 jars of mints.
Esther shares the mints equally
between 3 bowls.
How many mints are in each bowl?



There are mints in each bowl.

How many different ways can you work out the answer?

